

Homework #3, due Fri, 1/26

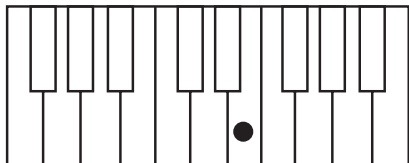
expires 2/23

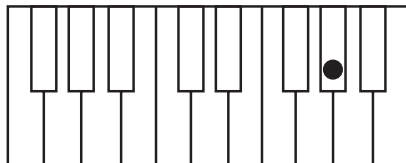
Name: _____

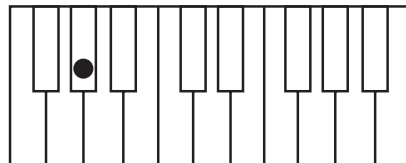
Notes on the Piano, Whole Steps and Half Steps

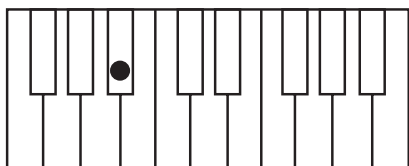
Please review our Theory Anthology chapters 4, 5 and 6 before you start.

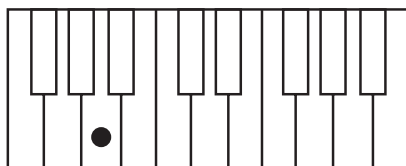
A. Identify the note marked with a dot. If the note is a black key give both possible enharmonically equivalent names (e.g. A# / Bb)

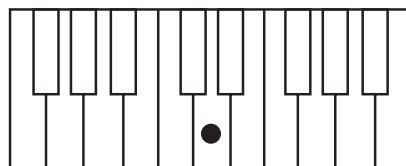


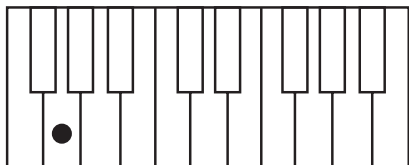


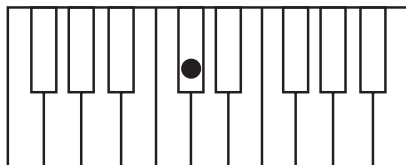


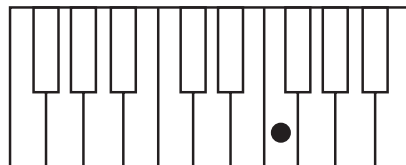






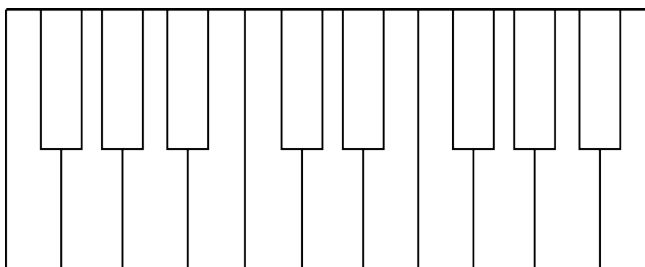




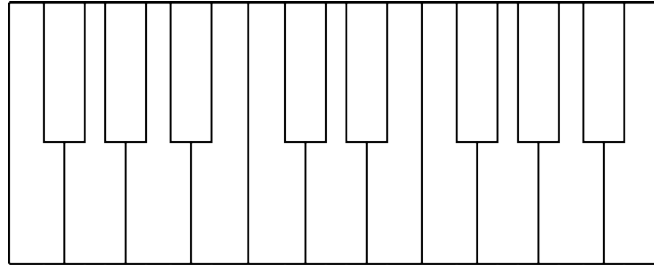


B. Mark three notes on the piano. If there are more than one possible places to mark a note, just pick one. :)

Please mark B \flat , G
and D \flat .



Please mark B, F[#]
and E^b.



C. Do these calculations for half steps and whole steps. If the answer has two possible enharmonic spellings (e.g. A[#] vs. B^b) you can just pick one.

- 1) What note is a half step up from A? _____
- 2) What note is a half step down from G? _____
- 3) What note is a whole step up from F[#]? _____
- 4) What note is a whole step up from A^b? _____
- 5) What note is a whole step down from F? _____
- 6) What note is a whole step down from D^b? _____